

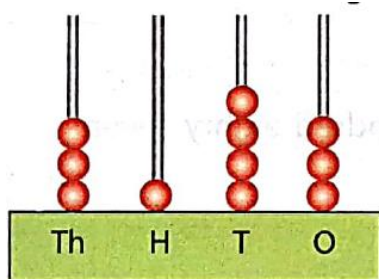
APS Dhrangadhra

Work sheet-Ch1

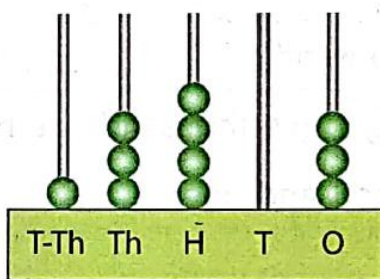
Sub: Math [Number & Number name]

class IV

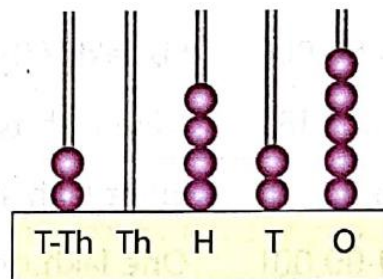
1. Write the number given on each of the following spike abacus:



(a)



(b)



(c)

2. Write the following numbers

a) 1 more than 10 →

b) 1 more than 1200 →

c) 1 more than 34500 →

d) 1 more than 23499 →

e) 1 more than 9999 →

f) 1 more than 10000 →

3. For each of the following, write the next four numbers starting from:

i) 78962, 78963, 78964, 78965

ii) 14609, 14610, 14611, 14612

iii) 25025, 25026, 25027, 25028

iv) 21235, 21236, 21237, 21238

4. Write the all numbers between:

(a) 18019 and 18025

(b) 27515 and 27518

5. Fill in the blank by observing the pattern carefully:

(a) 44322, 44324, 44326, _____, _____, _____, _____

(b) 12315, 12320, 12325, _____, _____, _____, _____

(c) 98310, 98410, 98510, _____, _____, _____, _____

(d) 22429, 23429, 24429, _____, _____, _____, _____

(e) 97826, 97726, 97626, _____, _____, _____, _____

6. Counting by fives, write the numbers from:

(a) 15515 to 15535

(b) 29331 to 29351

7. Counting by ten, write the numbers from:

(a) 32420 to 32450

8. Counting by hundred, write the numbers from:

(a) 43410 →

(b) 35275 →

9. Write the correct numeral in the table.

(a) 5 ten-thousands 3 thousands 0 hundreds 5 tens 4 ones

(b) 4 ten-thousands 9 thousands 1 hundreds 0 tens 9 ones

(c) 9 ten-thousands 0 thousands 0 hundreds 4 tens 3 ones

10. Write the number names for the following numbers:

54792 → _____

80576 → _____

16509 → _____

99087 → _____

60039 → _____

50005 → _____

29000 → _____

77070 → _____